

Minus verstehen



$$2 - 1 = \underline{1}$$



$$3 - 1 = \underline{\quad}$$



$$4 - 1 = \underline{\quad}$$



$$5 - 1 = \underline{\quad}$$



$$6 - 1 = \underline{\quad}$$



$$2 - 2 = \underline{\quad}$$

Minus verstehen



$$3 - 1 = \underline{\quad}$$



$$3 - 2 = \underline{\quad}$$



$$3 - 3 = \underline{\quad}$$



$$4 - 2 = \underline{\quad}$$



$$4 - 3 = \underline{\quad}$$



$$4 - 4 = \underline{\quad}$$

Minus verstehen



$$3 - 2 = \underline{\quad}$$



$$4 - 2 = \underline{\quad}$$



$$4 - 3 = \underline{\quad}$$



$$5 - 1 = \underline{\quad}$$



$$5 - 2 = \underline{\quad}$$



$$5 - 3 = \underline{\quad}$$

Minus verstehen



$$6 - 1 = \underline{\quad}$$



$$6 - 2 = \underline{\quad}$$



$$6 - 3 = \underline{\quad}$$



$$6 - 4 = \underline{\quad}$$



$$6 - 5 = \underline{\quad}$$



$$6 - 6 = \underline{\quad}$$

Minusaufgaben schreiben



$$\underline{3} - \underline{1} = \underline{2}$$



$$\underline{\quad} - \underline{\quad} = \underline{\quad}$$



$$\underline{\quad} - \underline{\quad} = \underline{\quad}$$



$$\underline{\quad} - \underline{\quad} = \underline{\quad}$$



$$\underline{\quad} - \underline{\quad} = \underline{\quad}$$



$$\underline{\quad} - \underline{\quad} = \underline{\quad}$$



$$\underline{\quad} - \underline{\quad} = \underline{\quad}$$



$$\underline{\quad} - \underline{\quad} = \underline{\quad}$$




$$\underline{\quad} - \underline{\quad} = \underline{\quad}$$




$$\underline{\quad} - \underline{\quad} = \underline{\quad}$$


Minusaufgaben schreiben




_____ - _____ = _____




_____ - _____ = _____




_____ - _____ = _____




_____ - _____ = _____




_____ - _____ = _____




_____ - _____ = _____




_____ - _____ = _____



_____ - _____ = _____



_____ - _____ = _____



_____ - _____ = _____